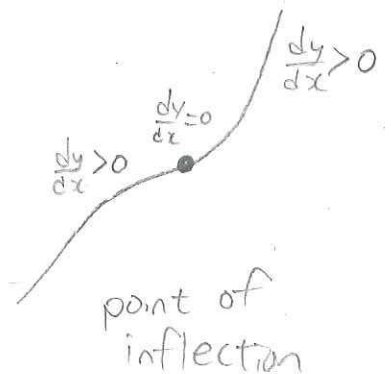
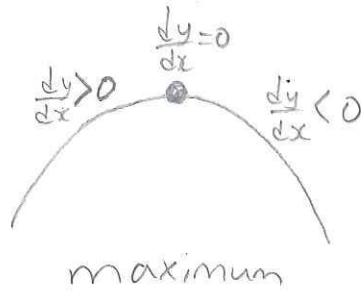
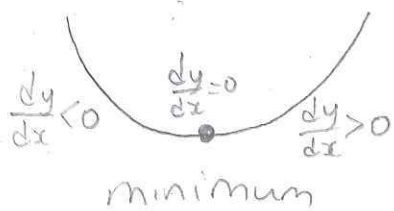


Stationary Points Quiz

For the following functions, identify if there are any stationary points, and if so whether it is a maximum, minimum or point of inflection.



① $y = x^2 - 7x + 12$

② $y = x^3 - 12x + 4$