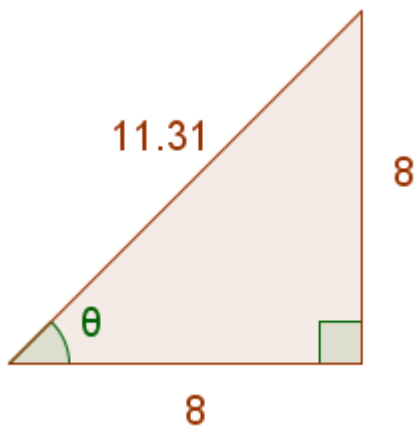


Magic Monk Tutorials

Trigonometry Lesson 2 worksheet

Q1. Find the unknown angle:

a)



You can use any trig ratio and get the same answer (provided you use the right formula and substitute the correct numbers in).

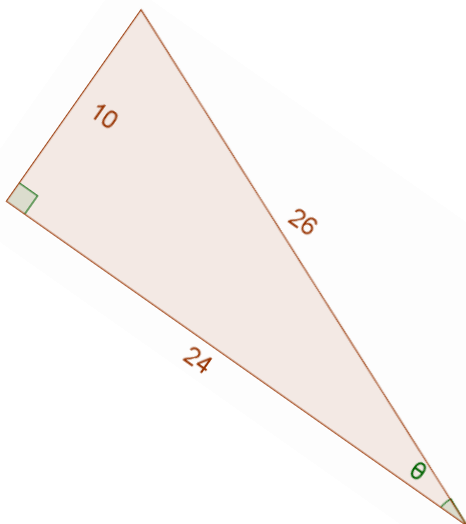
$$\tan\theta = \frac{\text{opp}}{\text{adj}}$$

$$\tan\theta = \frac{8}{8}$$

$$\theta = \tan^{-1}\left(\frac{8}{8}\right)$$

$$\theta = 45^\circ$$

b)



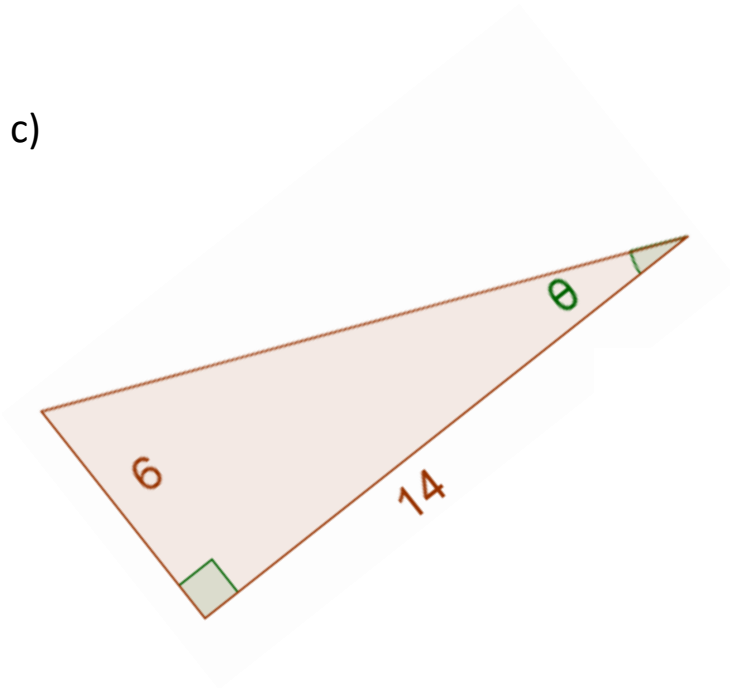
$$\sin\theta = \frac{\text{opp}}{\text{hyp}}$$

$$\sin\theta = \frac{10}{26}$$

$$\theta = \sin^{-1}\left(\frac{10}{26}\right)$$

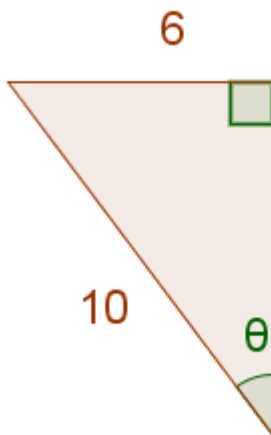
$$\theta = 22.62^\circ(2dp)$$

c)



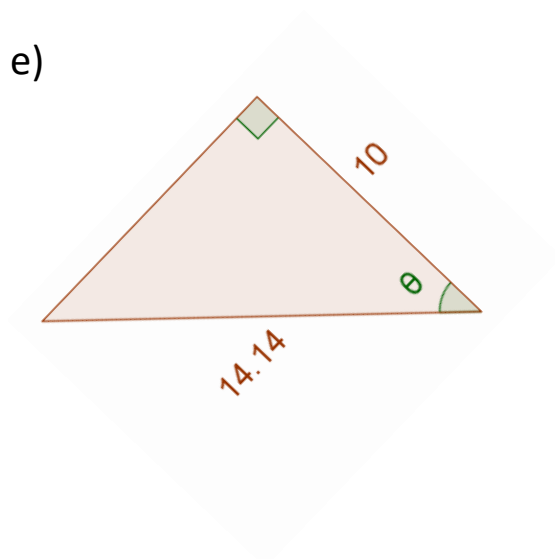
$$\begin{aligned}\tan\theta &= \frac{\text{opp}}{\text{adj}} \\ \tan\theta &= \frac{6}{14} \\ \theta &= \tan^{-1}\left(\frac{6}{14}\right) \\ \theta &= 23.20 \text{ (2dp)}\end{aligned}$$

d)



$$\begin{aligned}\sin\theta &= \frac{\text{opp}}{\text{hyp}} \\ \sin\theta &= \frac{6}{10} \\ \theta &= \sin^{-1}\left(\frac{6}{10}\right) \\ \theta &= 36.87^\circ\end{aligned}$$

e)



$$\begin{aligned}\cos\theta &= \frac{\text{adj}}{\text{hyp}} \\ \cos\theta &= \frac{10}{14.14} \\ \theta &= \cos^{-1}\left(\frac{10}{14.14}\right) \\ \theta &= 44.99^\circ\end{aligned}$$